

An abstract graphic featuring several overlapping, thick, curved lines in shades of green and blue. The lines are arranged in a way that suggests a stylized 'e' or 'c' shape, with the green lines on the left and blue lines on the right. The background is white.

Recognition assembly
15th November 2024

16/11/24
Related addition facts

Finish off the sequence. Represent it with your dienes on your table as you go.

$$6 + 2 = \boxed{8}$$

$$\boxed{1}6 + 2 = \boxed{18}$$

$$\boxed{2}6 + 2 = \boxed{28}$$

$$\boxed{3}6 + 2 = \boxed{38}$$

$$\boxed{4}6 + 2 = \boxed{48}$$

$$\boxed{5}6 + 2 = \boxed{58}$$

$$\boxed{6}6 + 2 = \boxed{68}$$

$$\boxed{7}6 + 2 = \boxed{78}$$

Use your number facts within 10 to help you work out these problems.

$$37 + 2 =$$

I know that $7 + 2 = 9$

So I know that $37 + 2 = 39$

$$64 + 3 =$$

I know that $4 + 3 = 7$

So I know that $64 + 3 = 67$

$$51 + 6 =$$

I know that $1 + 6 = 7$

So I know that $51 + 6 = 57$

$$83 + 2 =$$

I know that $3 + 2 = 5$

So I know that $83 + 2 = 85$

True or false:

When we add five ones to a number that ends in three, the total always ends in eight.

True
Explain your answer using numbers, words or drawings.

$$5 + 2 = 7 \quad 1005 + 2 = 1007$$

$$15 + 2 = 17$$

$$25 + 2 = 27$$

$$35 + 2 = 37$$

$$45 + 2 = 47$$

$$55 + 2 = 57$$

$$65 + 2 = 67$$

$$75 + 2 = 77$$

$$85 + 2 = 87$$

$$95 + 2 = 97$$

$$105 + 2 = 107$$

$$205 + 2 = 207$$

$$305 + 2 = 307$$

$$405 + 2 = 407$$

$$505 + 2 = 507$$

$$605 + 2 = 607$$

$$705 + 2 = 707$$

$$805 + 2 = 807$$

$$905 + 2 = 907$$

$$1005 + 2 = 1007$$

$$2005 + 2 = 2007$$

$$3005 + 2 = 3007$$

$$4005 + 2 = 4007$$

$$5005 + 2 = 5007$$

$$6005 + 2 = 6007$$

$$7005 + 2 = 7007$$

$$8005 + 2 = 8007$$

$$9005 + 2 = 9007$$

Story sequencing 14.11.24



Sister said
sister + sister said
Fluffy squishy
Bitty.



she went to
the bakery shop.
s
M



Mimi gave her
gave a Pearl
& button.



Emmett gave her
a green stamp.

PP1 - Overarching Information

8.11.24

1. What do hedgehogs eat? Look at your notes from yesterday. Add a **what** and then write the sentence below.





2. Where do hedgehogs live? Look at your notes from yesterday. Add a **where** and then write the sentence below.





3. During which month do hedgehogs hibernate? Add the **when** and then write the sentence below.





4. What preys on hedgehogs? Add a **who** and then write the sentence below.





Hedgehogs eat meat because they are carnivores.
 Some hedgehogs live in hives and some live in hives.
 Hedgehogs hibernate in the winter and to make them warm they make a big pile of leaves.
 Some foxes sometimes hunt hedgehogs.
 Hedgehogs hunt ladybugs, bees and ants at night.

Excellent!




Look at the picture to help you write a sentence.

Think about:







Shabbat

14/11/24

Shabbat is the Jewish day of rest, celebrated from sunset on Friday to sunset on Saturday.

custom
rest
shabbat
tzedakah



To celebrate Shabbat some families light candles and eat special bread.



On my day of rest, I don't rest, I always do something active. In the garden on Sundays I practise my cursive while my cat napping around in a bush.